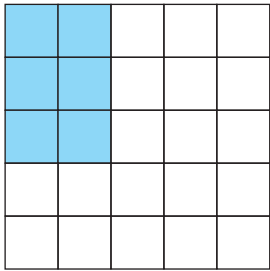


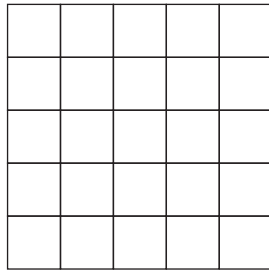
Einmaleins

Male die Felder aus und rechne!

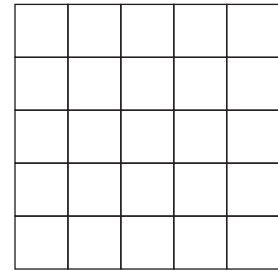
$2 \times 3 = \square$



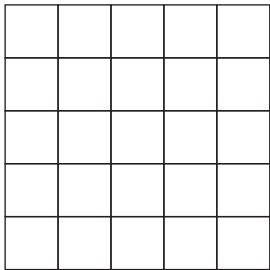
$4 \times 2 = \square$



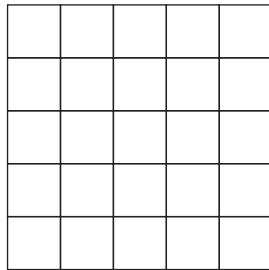
$2 \times 5 = \square$



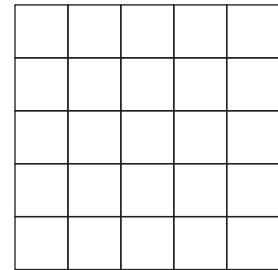
$3 \times 3 = \square$



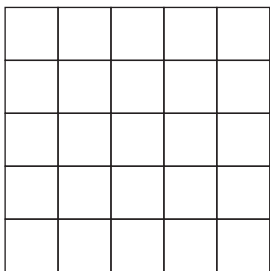
$5 \times 3 = \square$




$4 \times 4 = \square$



$3 \times 4 = \square$



$5 \times 4 = \square$



$5 \times 5 = \square$

