

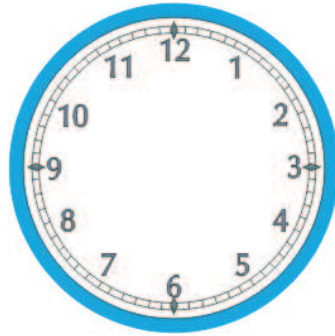
Mathe Online-Schule

Wie spät ist es?

Zeichne die Zeiger passend zur Uhrzeit auf den Uhren ein.



8:00 Uhr




11:00 Uhr




12:30 Uhr



8:45 Uhr




7:15 Uhr



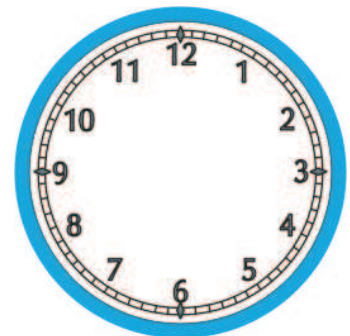
6:20 Uhr



9:45 Uhr



10:50 Uhr



11:35 Uhr