



# Mathe Online-Schule

## Wie spät ist es?


Trage die Uhrzeiten in beiden Schreibweisen ein!




4:00 Uhr  
16:00 Uhr




          Uhr  
          Uhr




          Uhr  
          Uhr




          Uhr  
          Uhr




          Uhr  
          Uhr



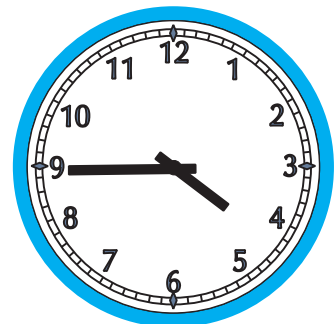
          Uhr  
          Uhr



          Uhr  
          Uhr



          Uhr  
          Uhr



          Uhr  
          Uhr