

Mathe Online-Schule

Welcher Bruchteil der Figur ist rot gefärbt?
Verbinde was zusammen passt!

$$\frac{4}{10}$$

$$\frac{2}{5}$$

$$\frac{3}{7}$$

$$\frac{5}{8}$$

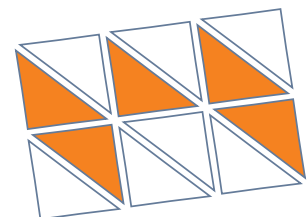
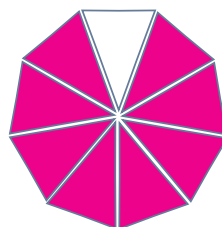
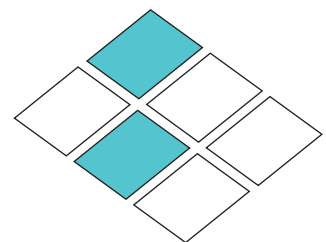


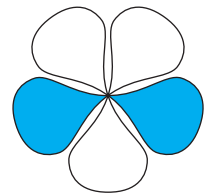
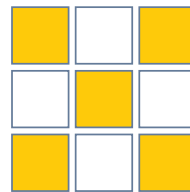

$$\frac{1}{4}$$

$$\frac{5}{9}$$

$$\frac{5}{12}$$

$$\frac{8}{9}$$

$$\frac{2}{6}$$



Mathe Online-Schule

Welcher Bruchteil der Figur ist rot gefärbt?
Verbinde was zusammen passt!

