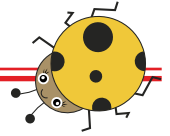
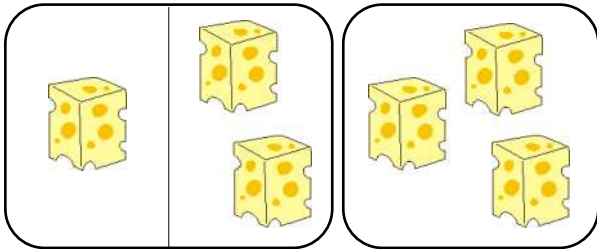



Einfache Addition



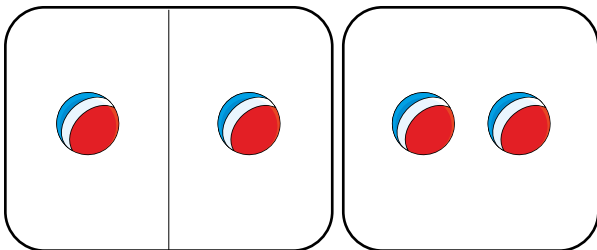
Schreibe die richtige Anzahl der Figuren in die Kästchen darunter und zähle sie dann zusammen.



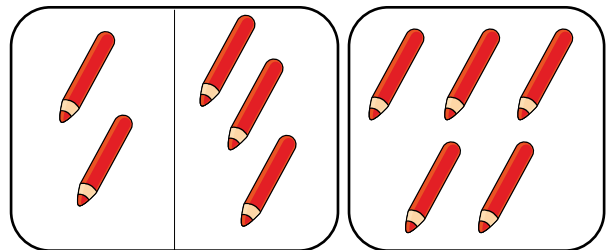
$$\boxed{1} + \boxed{} = \boxed{}$$



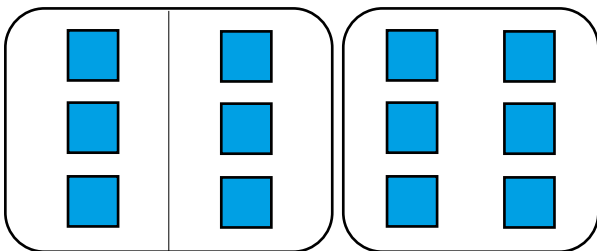
$$\boxed{} + \boxed{} = \boxed{}$$



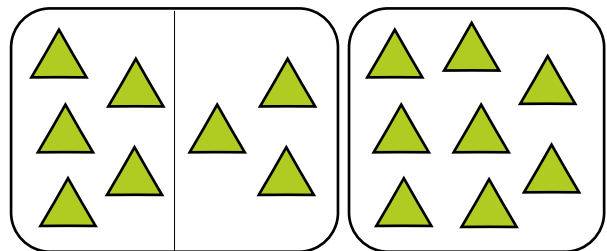
$$\boxed{} + \boxed{} = \boxed{}$$



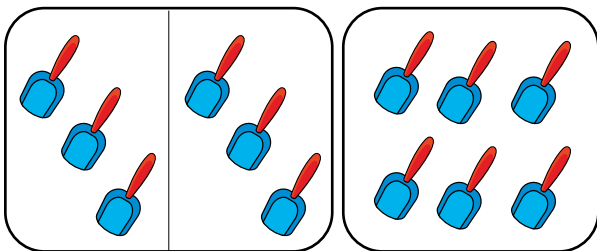
$$\boxed{} + \boxed{} = \boxed{}$$



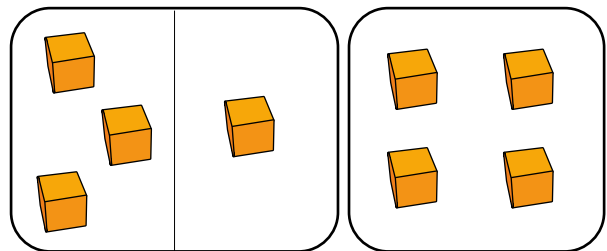
$$\boxed{} + \boxed{} = \boxed{}$$



$$\boxed{} + \boxed{} = \boxed{}$$



$$\boxed{} + \boxed{} = \boxed{}$$



$$\boxed{} + \boxed{} = \boxed{}$$