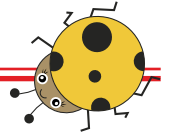



Einfache Addition




Wie viele gibt es insgesamt? Schreibe die richtige Anzahl der Figuren auf.




+




$2 + 1 = \underline{\quad}$




+



$3 + 2 = \underline{\quad}$




+



$2 + 4 = \underline{\quad}$



+




$1 + 3 = \underline{\quad}$




+



$4 + 3 = \underline{\quad}$



+



$2 + 2 = \underline{\quad}$