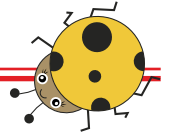
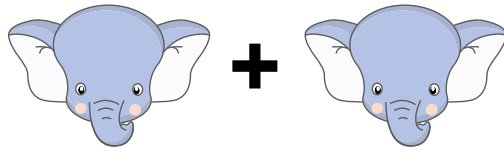


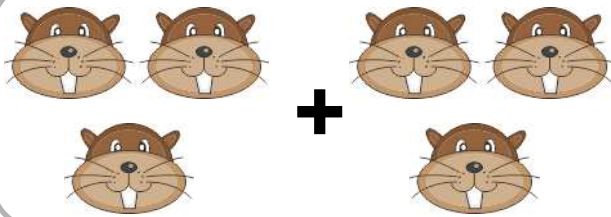
Einfache Addition



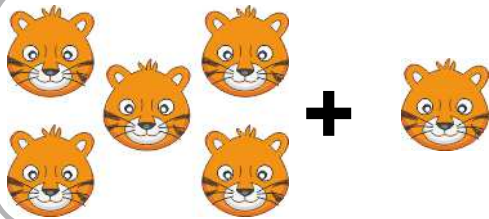
Wie viele gibt es insgesamt? Schreibe die richtige Anzahl der Figuren auf.




$1 + 1 = \underline{\quad}$



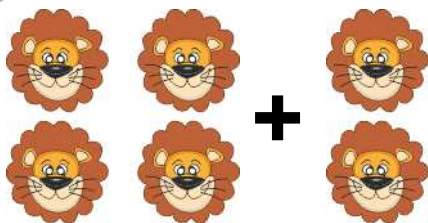
$3 + 3 = \underline{\quad}$




$5 + 1 = \underline{\quad}$



$2 + 6 = \underline{\quad}$



$4 + 2 = \underline{\quad}$



$3 + 5 = \underline{\quad}$