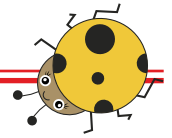




# Einfache Subtraktion




Streiche die richtige Anzahl der Figuren durch und zähle dann, wie viele noch übrig sind.




$$4 - 1 = \underline{\quad}$$



$$3 - 2 = \underline{\quad}$$



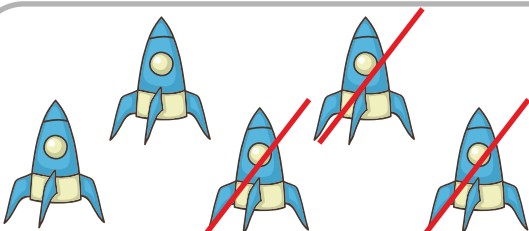
$$5 - 2 = \underline{\quad}$$



$$7 - 4 = \underline{\quad}$$



$$6 - 5 = \underline{\quad}$$



$$5 - 3 = \underline{\quad}$$