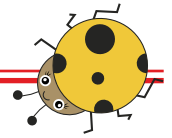








Einfache Zählaufgabe



Wie oft kommt das gleiche Tier vor?

Male für jedes Tier die richtige Anzahl der Kästchen an!



10					
9					
8					
7					
6					
5					
4					
3					
2					
1					
	